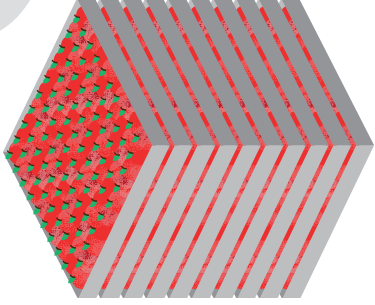


Counting in Thousands


Lesson 2







In Focus

There are 100 🍎 in one box.
There are 10 boxes in one stack.



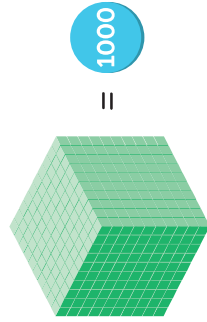
We can use  or **1** to represent one.



	 10 ones = 1 ten
	 10 tens = 1 hundred
	 10 hundreds = 1 thousand

There are 1000 🍎 in one stack.
How many 🍎 are there in 10 stacks?

Let's Learn



Use 1000 to show the number of  in each stack.



1000

1 thousand

1000
one thousand

1000 1000

2 thousands

2000
two thousand

1000 1000 1000

3 thousands

3000
three thousand

1000 1000 1000 1000

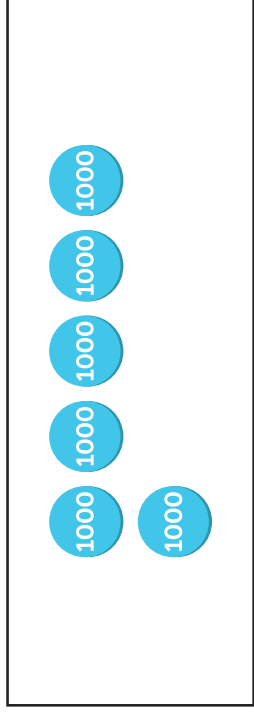
4 thousands

4000
four thousand

1000 1000 1000 1000 1000

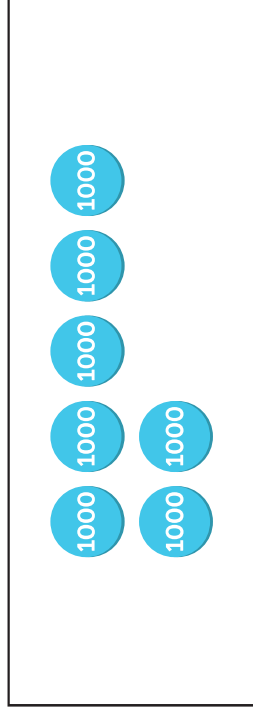
5 thousands

5000
five thousand



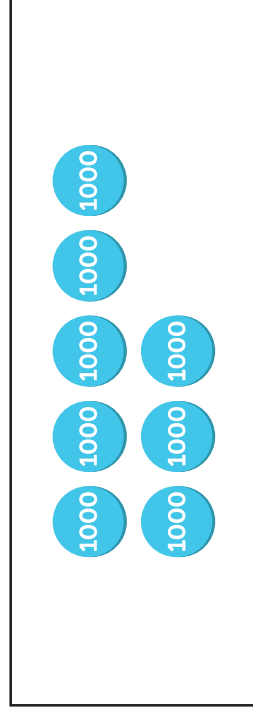
6 thousands

6000
six thousand



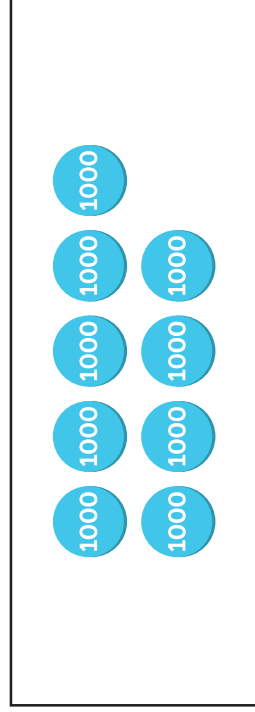
7 thousands

7000
seven thousand



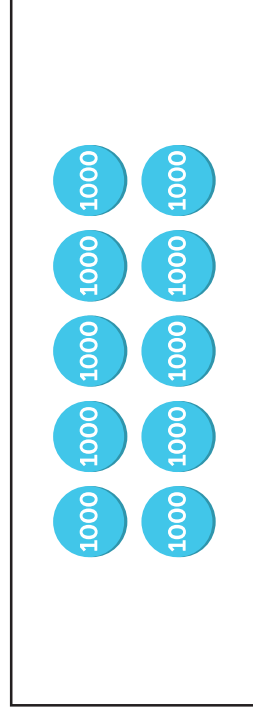
8 thousands

8000
eight thousand



9 thousands

9000
nine thousand



10 thousands

10 000
ten thousand




10 thousands = 10 000

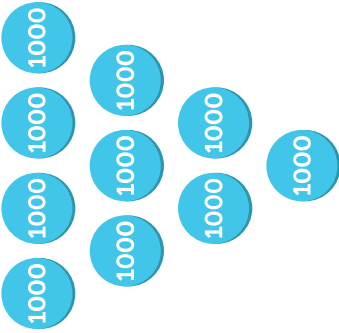



Guided Practice

1 What numbers are shown below?

(a)  

(b)  

(c)  

2 Complete the number patterns.

(a) 4 000, 5 000, , 7 000, , , 10 000

(b) 9 000, 8 000, 7 000, , , 4 000, 3 000

(c) 2 000, 4 000, 6 000, , 