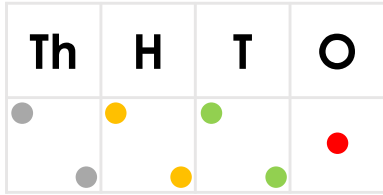


Subtract Two 4-Digit Numbers 1

Subtract Two 4-Digit Numbers 1

1a. Harry has subtracted 5,231 from 7,462. He has put counters into the place value chart to show his answer.

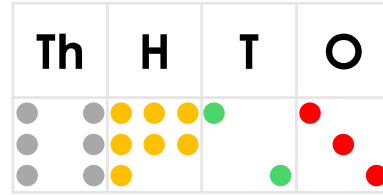


Is he correct? Explain why.



R

1b. Zoe has subtracted 3,236 from 9,549. She has put counters into the place value chart to show her answer.

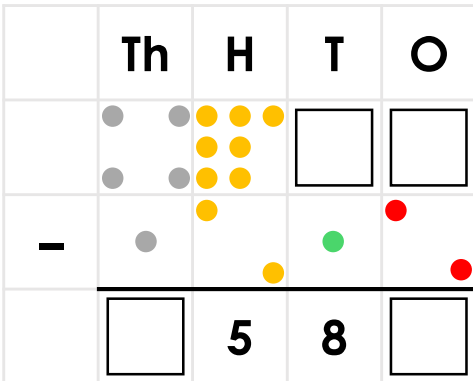


Is she correct? Explain why.



R

2a. Use counters and digits to complete the calculation below.

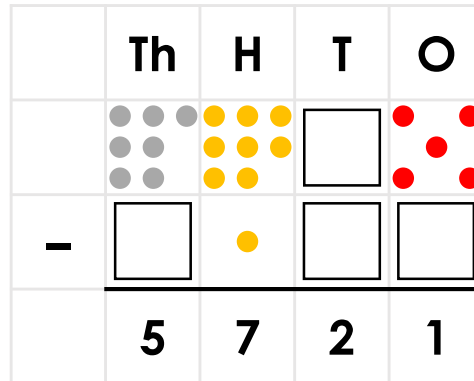


Your numbers must be odd.



PS

2b. Use counters and digits to complete the calculation below.

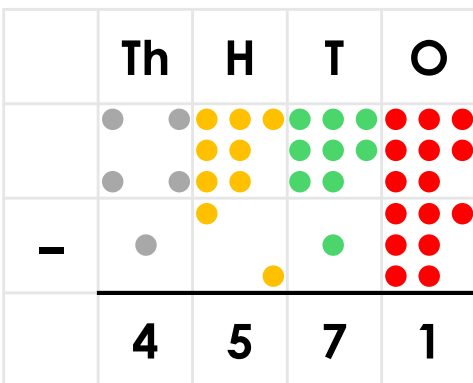


Your numbers must be even.



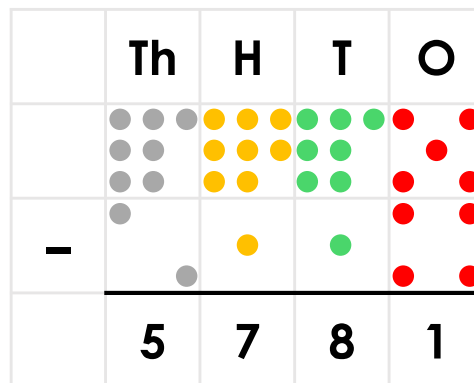
PS

3a. Explain the mistake in the calculation below.



R

3b. Explain the mistake in the calculation below.



R

Subtract Two 4-Digit Numbers 1

Subtract Two 4-Digit Numbers 1

4a. Peter has subtracted 1,053 from 3,675. He has put the numbers into the place value chart to show his answer.

Th	H	T	O
3	6	2	2

Is he correct? Explain why.



R

4b. Rochelle has subtracted 4,501 from 7,593. She has put counters into the place value chart to show her answer.

Th	H	T	O
3	5	9	2

Is she correct? Explain why.



R

5a. Complete the calculation below.

	Th	H	T	O
	9	7	<input type="text"/>	<input type="text"/>
-		<input type="text"/>	2	3
	9	<input type="text"/>	<input type="text"/>	0

You must include 6 and 9.



PS

5b. Complete the calculation below.

	Th	H	T	O
	6	9	7	<input type="text"/>
-	<input type="text"/>	0	<input type="text"/>	<input type="text"/>
	5	9	4	<input type="text"/>

You must include 7 and 8.



PS

6a. Explain the mistake in the calculation below.

	Th	H	T	O
	6	7	9	1
-		3	1	0
	6	4	8	0



R

6b. Explain the mistake in the calculation below.

	Th	H	T	O
	7	8	1	5
-	2	1	0	4
	9	7	1	1



R

Subtract Two 4-Digit Numbers 1

Subtract Two 4-Digit Numbers 1

7a. Henry has subtracted 4,140 from 5,175. His answer is shown below.

1,230

Is he correct? Explain why.



R

7b. Xin has subtracted 2,342 from 6,843. His answer is shown below.

4,541

Is she correct? Explain why.



R

8a. Complete the calculation below.

	Th	H	T	O
	5	<input type="text"/>	<input type="text"/>	<input type="text"/>
-		6	<input type="text"/>	4
	5	<input type="text"/>	2	<input type="text"/>

You must use 3 and 7. The rest of the numbers must be odd.



PS

8b. Complete the calculation below.

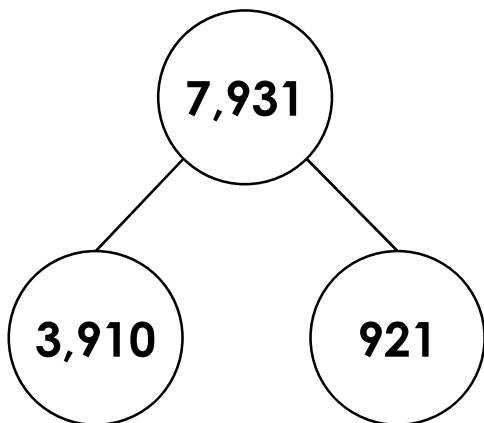
	Th	H	T	O
	9	8	8	<input type="text"/>
-	<input type="text"/>	0	<input type="text"/>	<input type="text"/>
	<input type="text"/>	8	0	<input type="text"/>

You must use 5 and 2. The rest of the numbers must be even.



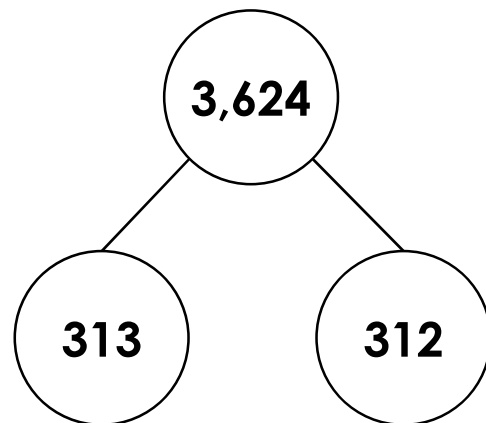
PS

9a. Explain the mistakes in the calculation below.



R

9b. Explain the mistakes in the calculation below.



R